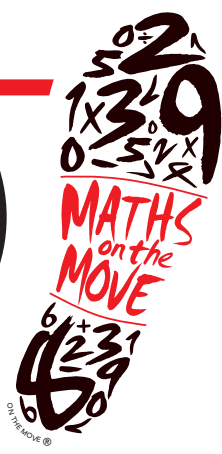


Question

1

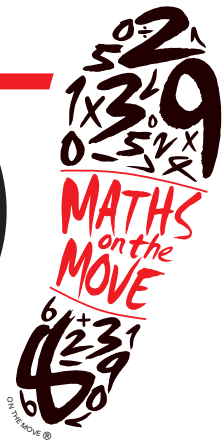


Bingo

7 years = _____ months

Question

2

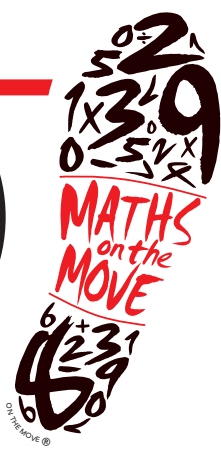


Bingo

Round the number
81,495 to the
nearest thousand

Question

3



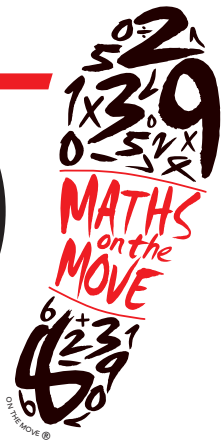
Bingo

1 football costs £3.00

How many footballs
could I buy with £50.00?

Question

4

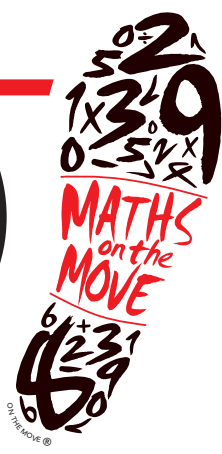


Bingo

4000 divided by 5

Question

5

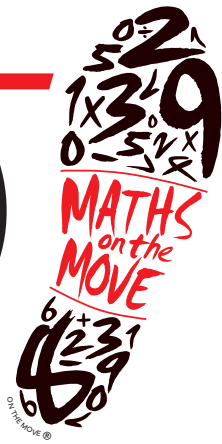


Bingo

$$\frac{3}{4} + \frac{1}{2}$$

Question

6

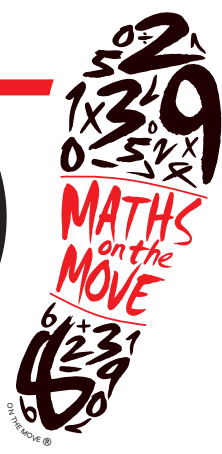


Bingo

$$1800 - 345$$

Question

7

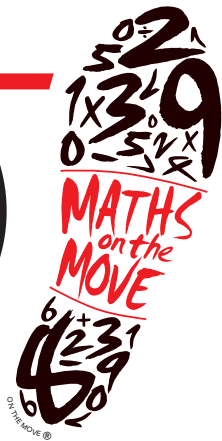


Bingo

$$34 \times 19$$

Question

8

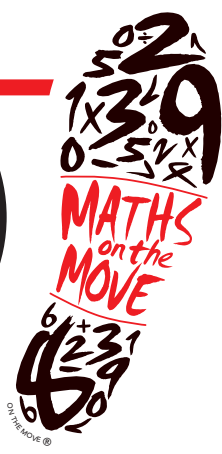


Bingo

$$7287 \text{ divided by } 7$$

Question

9

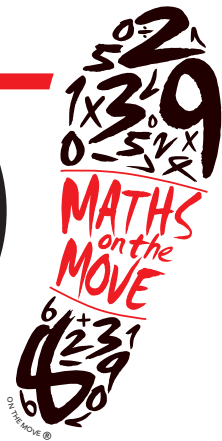


Bingo

$$6 + 4 \times 4$$

Question

10

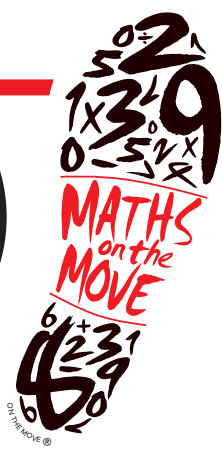


Bingo

$$40 + (42 \div 6)$$

Question

11

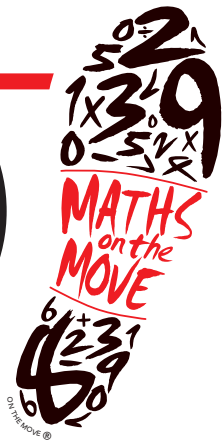


Bingo

$$48 + 2 \times 4$$

Question

12



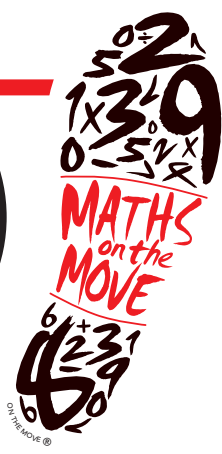
Bingo

What is this Roman Numeral?

XVII

Question

13

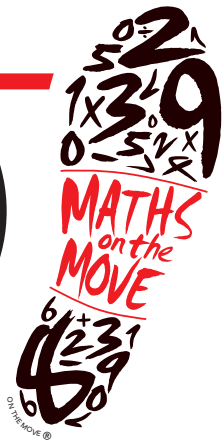


Bingo

$$199 + 299 + 399$$

Question

14



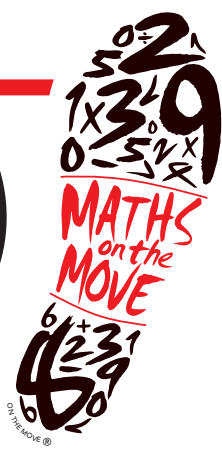
Bingo

What is this Roman Numeral?

XLV

Question

15



Bingo

Which of these numbers is a prime number?

35

36

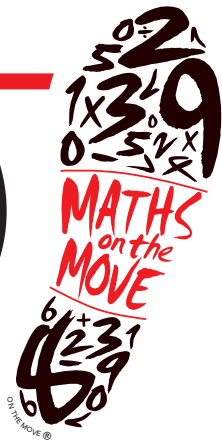
37

38

39

Question

16

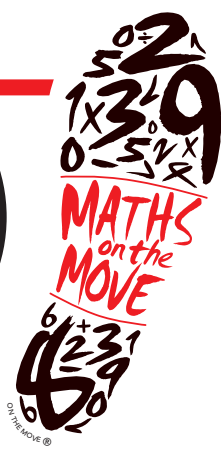


Bingo

$$6187 + 2999$$

Question

17

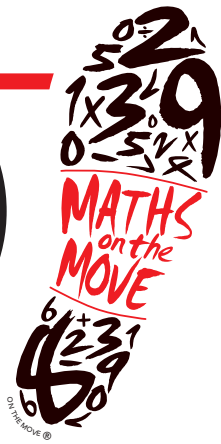


Bingo

$$\frac{7}{8} - \frac{1}{2}$$

Question

18

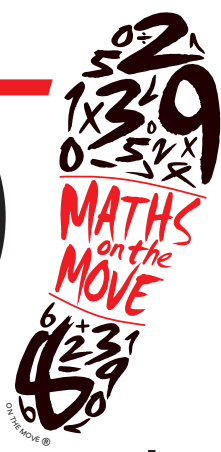


Bingo

$$\frac{1}{4} \times \frac{1}{2}$$

Question

19

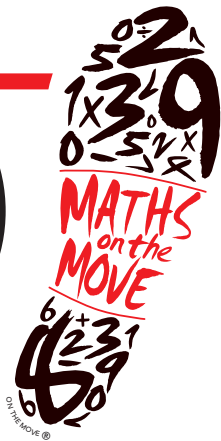


Bingo

The diameter of a circle is 25m.
What is the radius of the circle?

Question

20

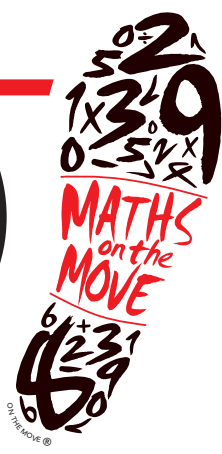


Bingo

$$\underline{\quad} - 100 = 2149$$

Question

21



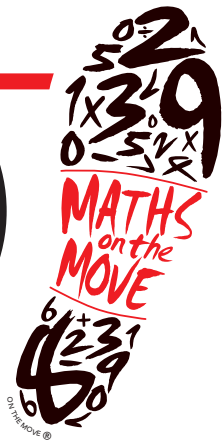
Bingo

Which is greater

0.42 or $\frac{2}{5}$?

Question

22

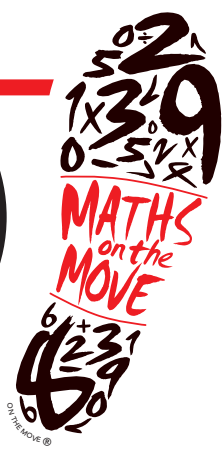


Bingo

What is 20% of 120?

Question

23



Bingo

Fill the gap to complete the sequence...

-8

-5

—

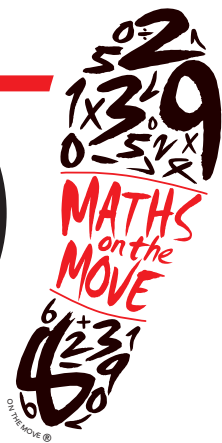
1

4

7

Question

24

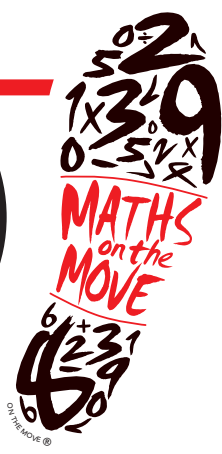


Bingo

0.2×15

Question

25

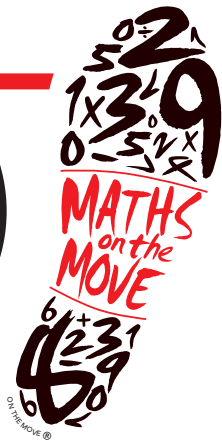


Bingo

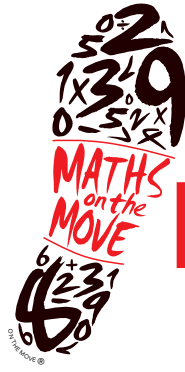
What is this Roman Numeral?

MCMX

Question




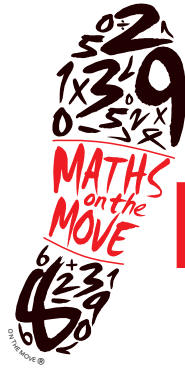
Bingo



Bingo

Name _____

$1\frac{1}{4}$ Question <input type="checkbox"/>	800 Question <input type="checkbox"/>	37 Question <input type="checkbox"/>	16 Question <input type="checkbox"/>		
1041 Question <input type="checkbox"/>	2249 Question <input type="checkbox"/>	$\frac{1}{8}$ Question <input type="checkbox"/>	3 Question <input type="checkbox"/>		
9186 Question <input type="checkbox"/>	1910 Question <input type="checkbox"/>	81,000 Question <input type="checkbox"/>	-2 Question <input type="checkbox"/>	1455 Question <input type="checkbox"/>	0.42 Question <input type="checkbox"/>
897 Question <input type="checkbox"/>	17 Question <input type="checkbox"/>	45 Question <input type="checkbox"/>	24 Question <input type="checkbox"/>	47 Question <input type="checkbox"/>	$\frac{3}{8}$ Question <input type="checkbox"/>
646 Question <input type="checkbox"/>	56 Question <input type="checkbox"/>	84 Question <input type="checkbox"/>	12.5 Question <input type="checkbox"/>	22 Question <input type="checkbox"/>	



Bingo

Name _____

$1\frac{1}{4}$ Question <input type="checkbox"/>	800 Question <input type="checkbox"/>	37 Question <input type="checkbox"/>	16 Question <input type="checkbox"/>		
1041 Question <input type="checkbox"/>	2249 Question <input type="checkbox"/>	$\frac{1}{8}$ Question <input type="checkbox"/>	3 Question <input type="checkbox"/>		
9186 Question <input type="checkbox"/>	1910 Question <input type="checkbox"/>	81,000 Question <input type="checkbox"/>	-2 Question <input type="checkbox"/>	1455 Question <input type="checkbox"/>	0.42 Question <input type="checkbox"/>
897 Question <input type="checkbox"/>	17 Question <input type="checkbox"/>	45 Question <input type="checkbox"/>	24 Question <input type="checkbox"/>	47 Question <input type="checkbox"/>	$\frac{3}{8}$ Question <input type="checkbox"/>
646 Question <input type="checkbox"/>	56 Question <input type="checkbox"/>	84 Question <input type="checkbox"/>	12.5 Question <input type="checkbox"/>	22 Question <input type="checkbox"/>	